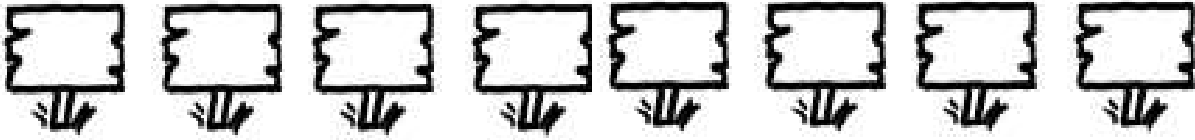



Prénom : _____

Date: _____


CALCULS : la table de 4




1 Ecris la multiplication correspondante et calcule:




$$_ \times _ = _$$



$$_ \times _ = _$$



$$_ \times _ = _$$



$$_ \times _ = _$$

2 Calcule :

$$4 \times 5 = _$$

$$4 \times 1 = _$$

$$4 \times 3 = _$$

$$4 \times 4 = _$$

$$4 \times 0 = _$$

$$4 \times 7 = _$$

$$4 \times 8 = _$$

$$4 \times 9 = _$$

$$4 \times 10 = _$$

$$4 \times 6 = _$$

$$4 \times 2 = _$$

$$4 \times 20 = _$$

Problème :

6 enfants sont dans un verger. Ils ont le droit de cueillir 4 kg de pêches.

Combien de kilogrammes vont-ils cueillir ?

dessin ou calcul :

phrase réponse :
